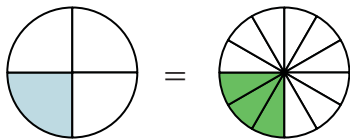


Shade in the visual fraction to find the equivalent fraction.

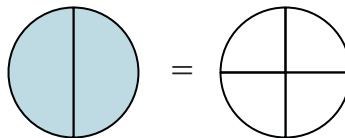
Ex)

$$\frac{1}{4} = \frac{3}{12}$$



1)

$$\frac{2}{2} =$$

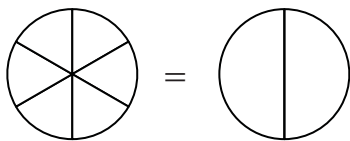


Answers

Ex. $\frac{3}{12}$

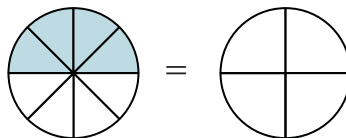
2)

$$\frac{0}{6} =$$



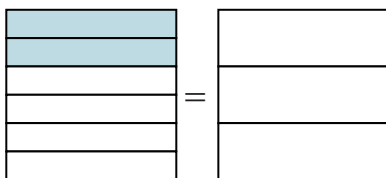
3)

$$\frac{4}{8} =$$



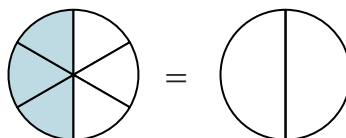
4)

$$\frac{2}{6} =$$



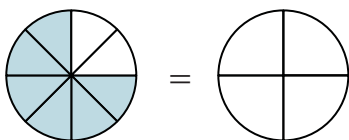
5)

$$\frac{3}{6} =$$



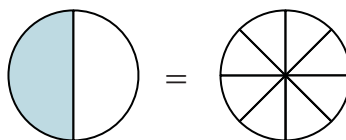
6)

$$\frac{6}{8} =$$



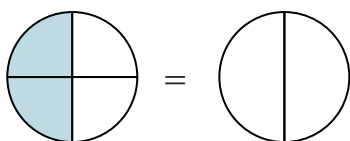
7)

$$\frac{1}{2} =$$



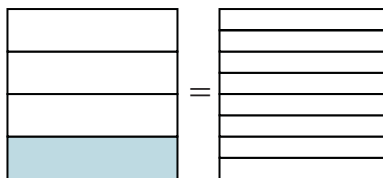
8)

$$\frac{2}{4} =$$



9)

$$\frac{1}{4} =$$



1. _____

2. _____

3. _____

4. _____

5. _____

6. _____

7. _____

8. _____

9. _____