

Name : _____

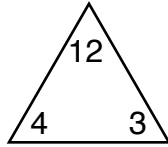
Score : _____

Teacher : _____

Date : _____

Complete Each Family of Facts

1)



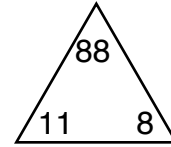
$$\square \times \square = \square$$

$$\square \times \square = \square$$

$$\square \div \square = \square$$

$$\square \div \square = \square$$

4)



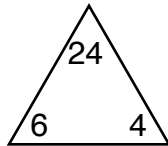
$$\square \times \square = \square$$

$$\square \times \square = \square$$

$$\square \div \square = \square$$

$$\square \div \square = \square$$

2)



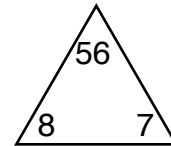
$$\square \times \square = \square$$

$$\square \times \square = \square$$

$$\square \div \square = \square$$

$$\square \div \square = \square$$

5)



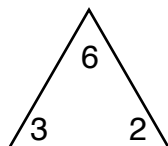
$$\square \times \square = \square$$

$$\square \times \square = \square$$

$$\square \div \square = \square$$

$$\square \div \square = \square$$

3)



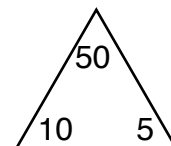
$$\square \times \square = \square$$

$$\square \times \square = \square$$

$$\square \div \square = \square$$

$$\square \div \square = \square$$

6)



$$\square \times \square = \square$$

$$\square \times \square = \square$$

$$\square \div \square = \square$$

$$\square \div \square = \square$$

Name : _____

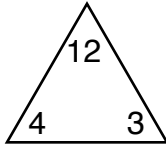
Score : _____

Teacher : _____

Date : _____

Complete Each Family of Facts

1)



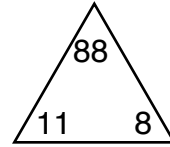
$$\boxed{4} \times \boxed{3} = \boxed{12}$$

$$\boxed{3} \times \boxed{4} = \boxed{12}$$

$$\boxed{12} \div \boxed{3} = \boxed{4}$$

$$\boxed{12} \div \boxed{4} = \boxed{3}$$

4)



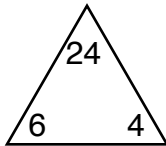
$$\boxed{11} \times \boxed{8} = \boxed{88}$$

$$\boxed{8} \times \boxed{11} = \boxed{88}$$

$$\boxed{88} \div \boxed{8} = \boxed{11}$$

$$\boxed{88} \div \boxed{11} = \boxed{8}$$

2)



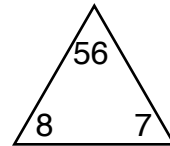
$$\boxed{6} \times \boxed{4} = \boxed{24}$$

$$\boxed{4} \times \boxed{6} = \boxed{24}$$

$$\boxed{24} \div \boxed{4} = \boxed{6}$$

$$\boxed{24} \div \boxed{6} = \boxed{4}$$

5)



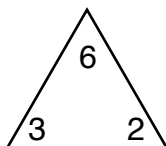
$$\boxed{8} \times \boxed{7} = \boxed{56}$$

$$\boxed{7} \times \boxed{8} = \boxed{56}$$

$$\boxed{56} \div \boxed{7} = \boxed{8}$$

$$\boxed{56} \div \boxed{8} = \boxed{7}$$

3)



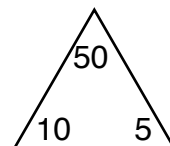
$$\boxed{3} \times \boxed{2} = \boxed{6}$$

$$\boxed{2} \times \boxed{3} = \boxed{6}$$

$$\boxed{6} \div \boxed{2} = \boxed{3}$$

$$\boxed{6} \div \boxed{3} = \boxed{2}$$

6)



$$\boxed{10} \times \boxed{5} = \boxed{50}$$

$$\boxed{5} \times \boxed{10} = \boxed{50}$$

$$\boxed{50} \div \boxed{5} = \boxed{10}$$

$$\boxed{50} \div \boxed{10} = \boxed{5}$$