

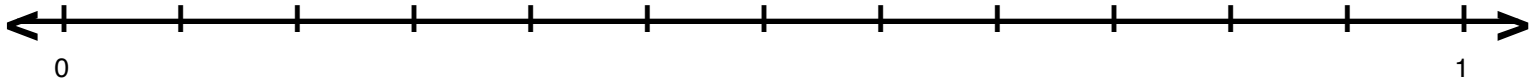
Name : \_\_\_\_\_

Score : \_\_\_\_\_

Teacher : \_\_\_\_\_

Date : \_\_\_\_\_

## Fractions on Number Lines

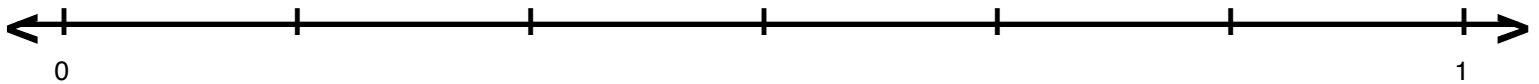


**A** =  $\frac{1}{2}$

**B** =  $\frac{1}{4}$

**C** =  $\frac{2}{3}$

**D** =  $\frac{3}{4}$

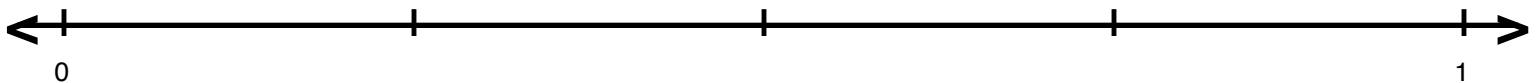


**A** =  $\frac{5}{6}$

**B** =  $\frac{1}{6}$

**C** =  $\frac{1}{3}$

**D** =  $\frac{2}{3}$

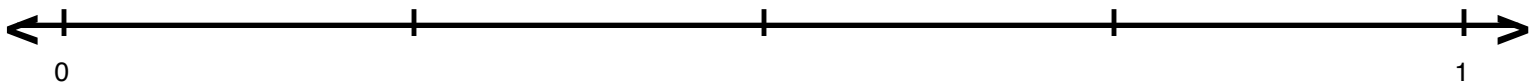


**A** =  $\frac{1}{2}$

**B** =  $1$

**C** =  $\frac{3}{4}$

**D** =  $\frac{1}{4}$

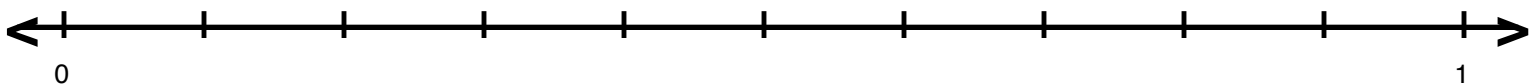


**A** =  $1$

**B** =  $\frac{3}{4}$

**C** =  $\frac{1}{2}$

**D** =  $\frac{1}{4}$



**A** =  $\frac{9}{10}$

**B** =  $\frac{4}{5}$

**C** =  $\frac{2}{5}$

**D** =  $\frac{1}{5}$

